



I am going to this beach. Follow the clues to find out where it is!



I am at the star. ★

I go three squares west.

Where am I?



I am going to this beach. Follow the clues to find out where it is!



I am at the star. ★

I go three squares south.

Where am I?



I am going to this beach. Follow the clues to find out where it is!




I am at the star. ★

I go one square north and one square west.

Where am I?



I am going to this beach. Follow the clues to find out where it is!



I am at the star. ★

I go two squares east and one square south.

Where am I?





I am going to this beach. Follow the clues to find out where it is!




I am at the star. ★

I go one square north and one square east.

Where am I?



I am going to this beach. Follow the clues to find out where it is!



I am at the star. ★

I go three squares east.

Where am I?

Arctic Ocean

North America

Europe

Asia

Pacific Ocean

Atlantic Ocean

Africa

India

Indian Ocean

Australia

New Zealand

South America

Peru

Mexico

Portugal

Southern Ocean

Antartica

North

West

East

South

I am going to this beach. Follow the clues to find out where it is!

I am at the star. I go two squares north and three squares west.

Where am I?

Which continent is it in?

Arctic Ocean

North America

Europe

Asia

Pacific Ocean

Atlantic Ocean

Africa

India

Indian Ocean

Australia

New Zealand

South America

Peru

Mexico

Portugal

Southern Ocean

Antartica

North

West

East

South

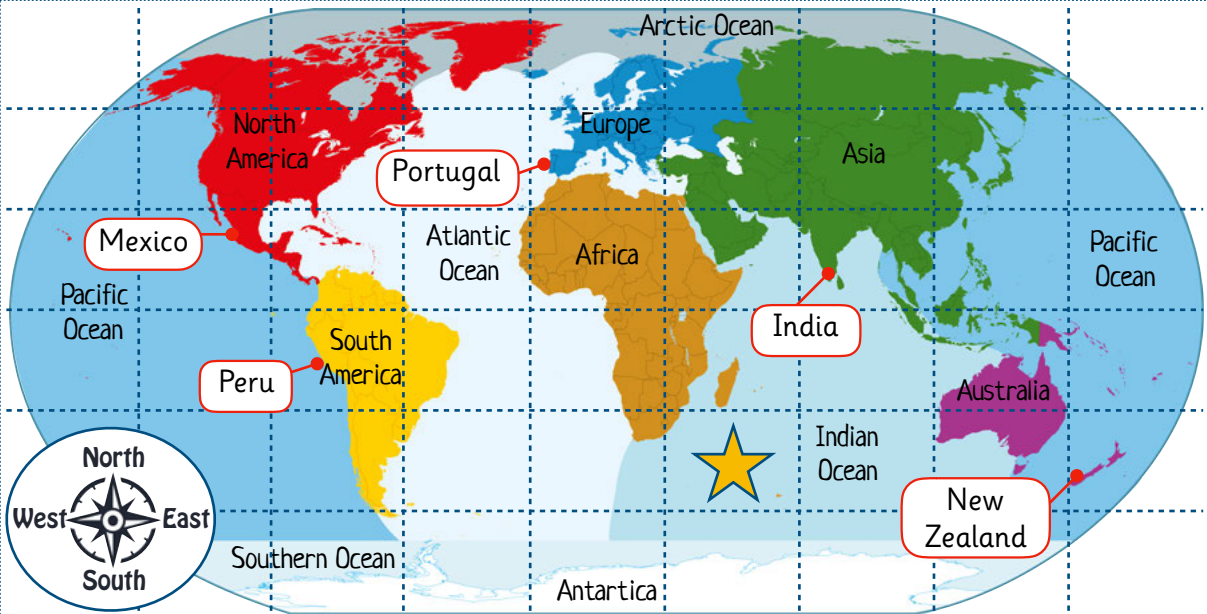
I am going to this beach. Follow the clues to find out where it is!

I am at the star. I go two squares south and three squares west.

Where am I?

Which continent is it in?





Arctic Ocean

North America

Europe

Asia

Pacific Ocean

Atlantic Ocean

Africa

India

Indian Ocean

Australia

New Zealand

South America

Peru

Mexico

Portugal

Southern Ocean

Antarctica

North

West

East


South

I am going to this beach. Follow the clues to find out where it is!

I am at the star. I go three squares north and one square west.

Where am I?

Which continent is it in?



Arctic Ocean

North America

Europe

Asia

Pacific Ocean

Atlantic Ocean

Africa

India

Indian Ocean

Australia

New Zealand

South America

Peru

Mexico

Portugal

Southern Ocean

Antarctica

North

West

East

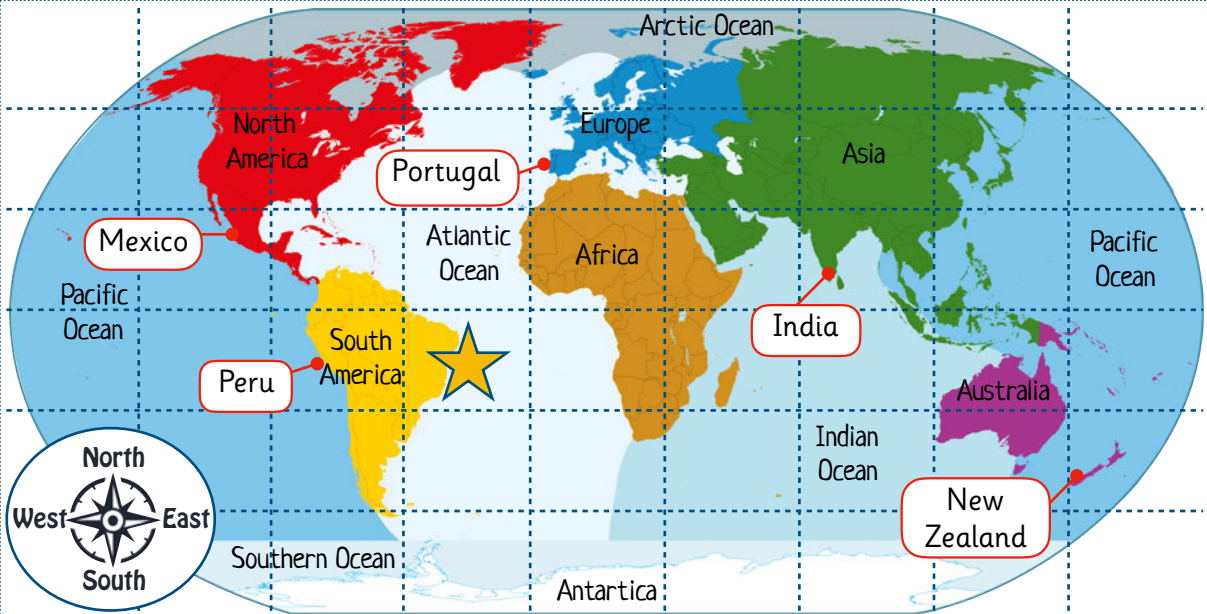
South

I am going to this beach. Follow the clues to find out where it is!

I am at the star. I go two squares north and three squares east.

Where am I?

Which continent is it in?



Arctic Ocean

North America

Europe

Asia

Pacific Ocean

Atlantic Ocean

Africa

India

Indian Ocean

Australia

New Zealand

South America

Peru

Mexico

Portugal

Southern Ocean


Antartica

North

West

East

South




I am going to this beach. Follow the clues to find out where it is!

I am at the star. I go five squares east and one square south.

Where am I?

Which continent is it in?



Arctic Ocean

North America

Europe

Asia

Pacific Ocean

Atlantic Ocean

Africa

Japan

Indian Ocean

Australia

Madagascar

South America

Argentina

Canada

Southern Ocean


Antartica

North

West

East

South




I am going to this beach. Follow the clues to find out where it is!

I am at the star. I go four squares north and four squares west.

Where am I?

Which continent is it in?





Arctic Ocean

Europe

Asia

Japan

Pacific Ocean

Canada

North America

Atlantic Ocean

Africa

South America

Madagascar

India Ocean

Australia

Argentina

Southern Ocean


Antarctica

North

West

East

South

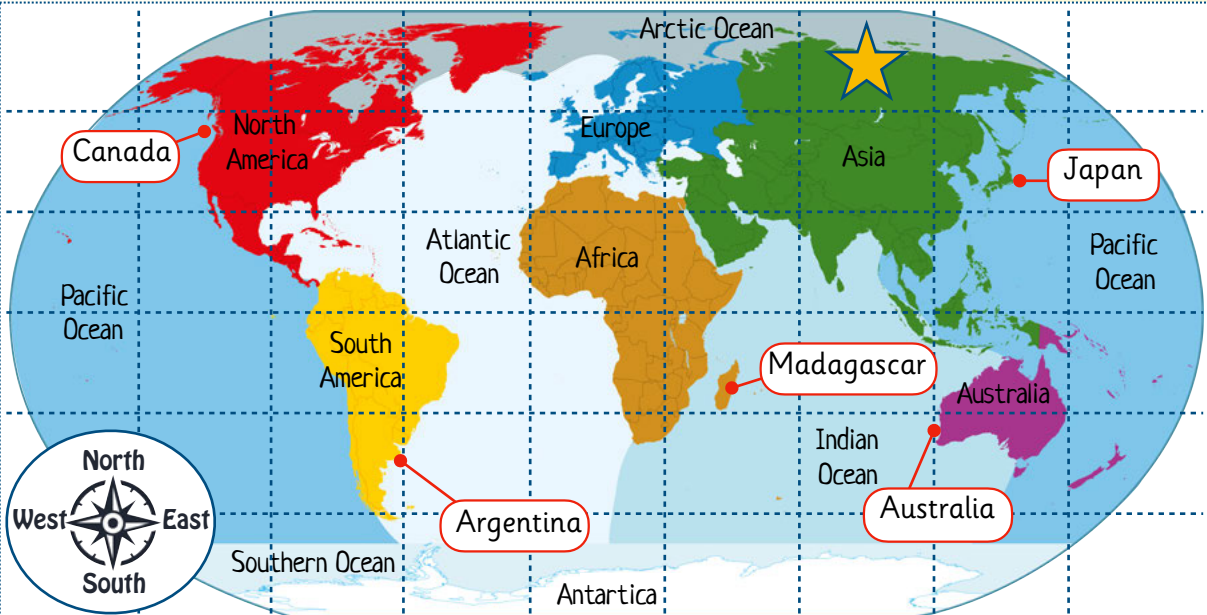


I am going to this beach. Follow the clues to find out where it is!

I am at the star. I go four squares south and one square west.

Where am I?

Which continent is it in?



Arctic Ocean

Europe

Asia

Japan

Pacific Ocean

Canada

North America

Atlantic Ocean

Africa

South America

Madagascar

India Ocean

Australia

Argentina

Southern Ocean


Antarctica

North

West

East

South




I am going to this beach. Follow the clues to find out where it is!

I am at the star. I go three squares south and one square west.

Where am I?

Which continent is it in?



A world map with a grid of squares. A yellow star is located in the Arctic Ocean, four squares north of the equator and four squares east of the Prime Meridian. A red dot is located in the Pacific Ocean, four squares south of the equator and four squares east of the Prime Meridian. A small photo of a sandy beach is in the bottom left corner.

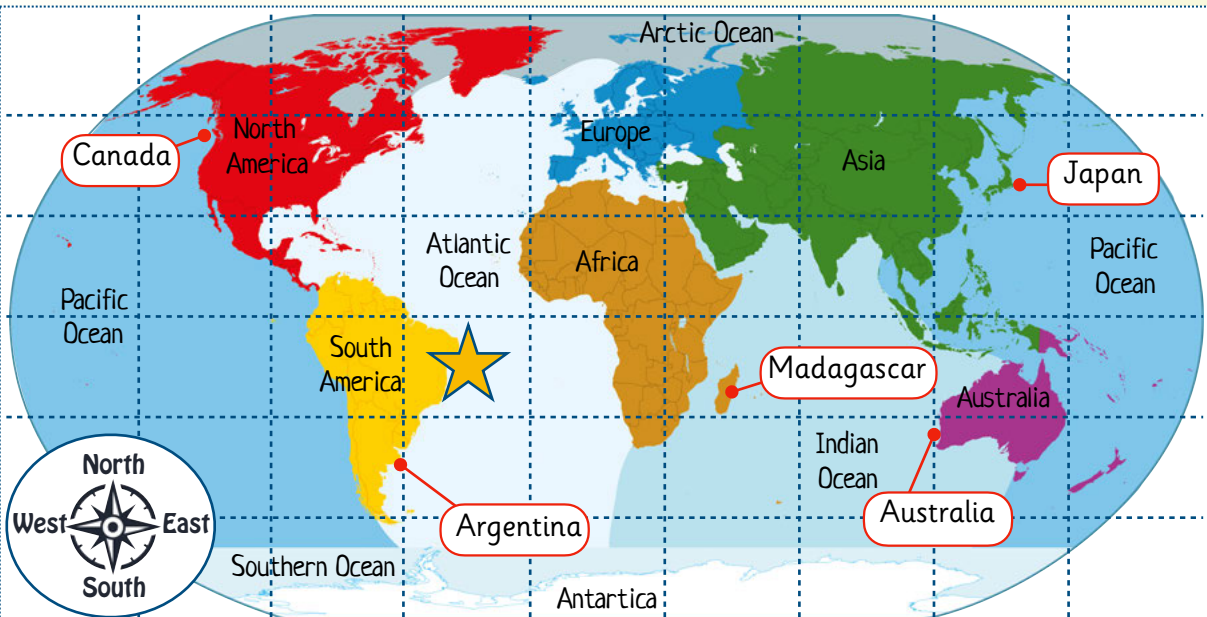
Canada, North America, South America, Argentina, Africa, Madagascar, Australia, Asia, Japan, Europe, Atlantic Ocean, Pacific Ocean, Indian Ocean, Southern Ocean, Antarctica, North, South, West, East.

I am going to this beach. Follow the clues to find out where it is!

I am at the star. I go four squares south and four squares east.

Where am I?

Which continent is it in?



A world map with a grid of squares. A yellow star is located in South America, two squares north of the equator and four squares east of the Prime Meridian. A red dot is located in the Pacific Ocean, four squares south of the equator and four squares east of the Prime Meridian. A small photo of a rocky beach is in the bottom left corner.

Canada, North America, South America, Argentina, Africa, Madagascar, Australia, Asia, Japan, Europe, Atlantic Ocean, Pacific Ocean, Indian Ocean, Southern Ocean, Antarctica, North, South, West, East.

I am going to this beach. Follow the clues to find out where it is!

I am at the star. I go two squares north and four squares east.

Where am I?

Which continent is it in?





I am going to this beach. Follow the clues to find out where it is!



I am at the star. ★

I go one square north and one square west.

Where am I?

**Milford Haven**



I am going to this beach. Follow the clues to find out where it is!



I am at the star. ★

I go two squares east and one square south.

Where am I?

**Boscastle**

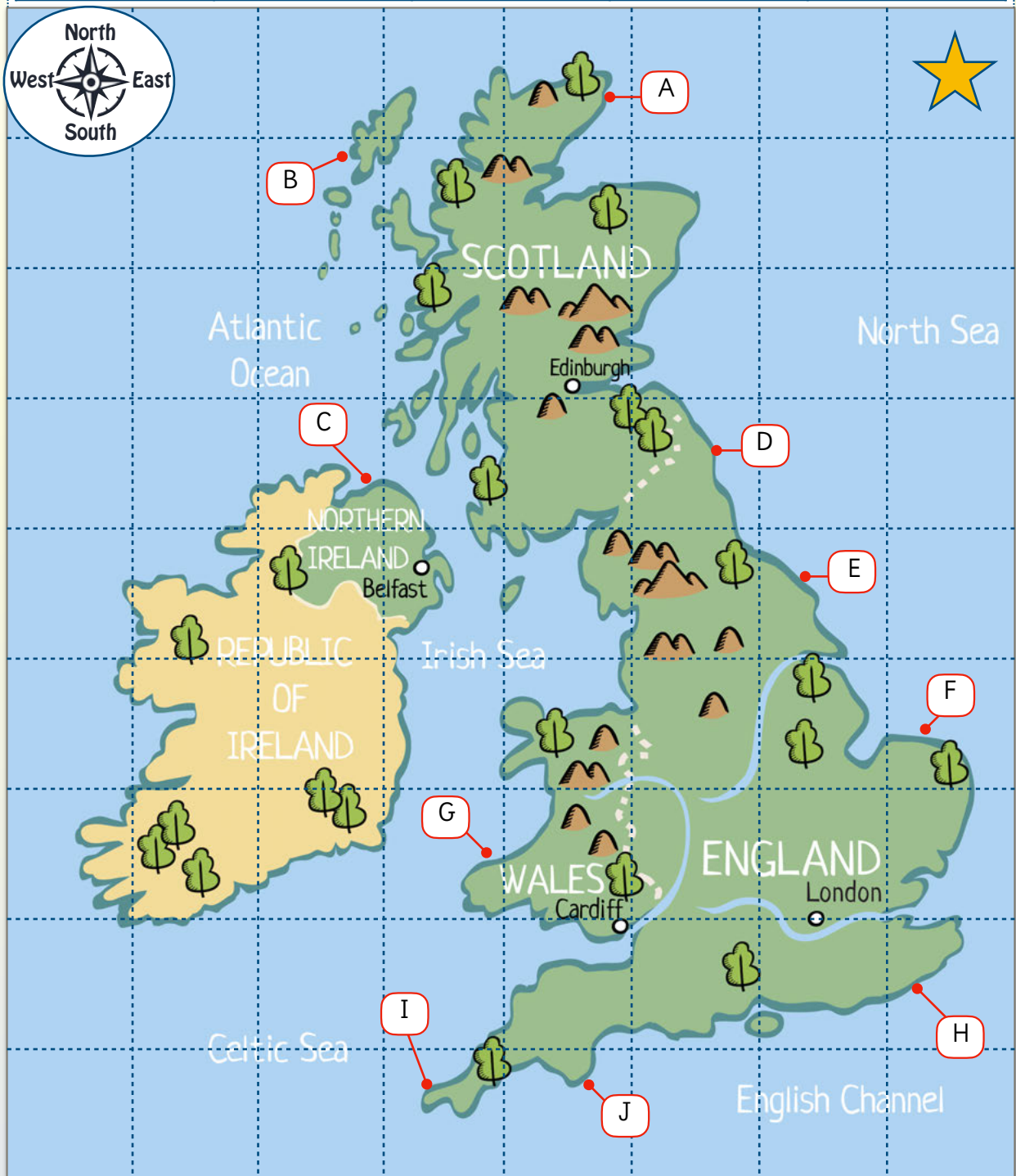
Name: \_\_\_\_\_

Date: \_\_\_\_\_



Follow the clues to travel around the map. Record your route around the map.  
Record the names of the the beaches in the grid below.

A	B	C	D	E
F	G	H	I	J







I start at the star. I travel three squares south and five squares east to reach the beach at Portrush.




Next I travel one square east and three squares south to reach the port of Fishguard.



Next I travel two squares south to reach St Ives.




Next I travel one square east to reach Dartmouth.



Next I travel three squares north and three squares east to reach Blakeney.



Next I travel two squares south to reach Folkestone Harbour.




Next I travel two squares west and four squares north to reach Bamburgh.



Next I travel two squares north and three squares west to reach Hushinish.



Next I travel one square north and two squares east to reach Caithness.



Finally I travel two squares east and four squares south to reach Scarborough.



I start at the star. I travel three squares south and five squares east to reach the beach at Portrush.



Next I travel one square east and three squares south to reach the port of Fishguard.



Next I travel two squares south to reach St Ives.




Next I travel one square east to reach Dartmouth.



Next I travel three squares north and three squares east to reach Blakeney.



Next I travel two squares south to reach Folkestone Harbour.




Next I travel two squares west and four squares north to reach Bamburgh.



Next I travel two squares north and three squares west to reach Hushinish.



Next I travel one square north and two squares east to reach Caithness.



Finally I travel two squares east and four squares south to reach Scarborough.

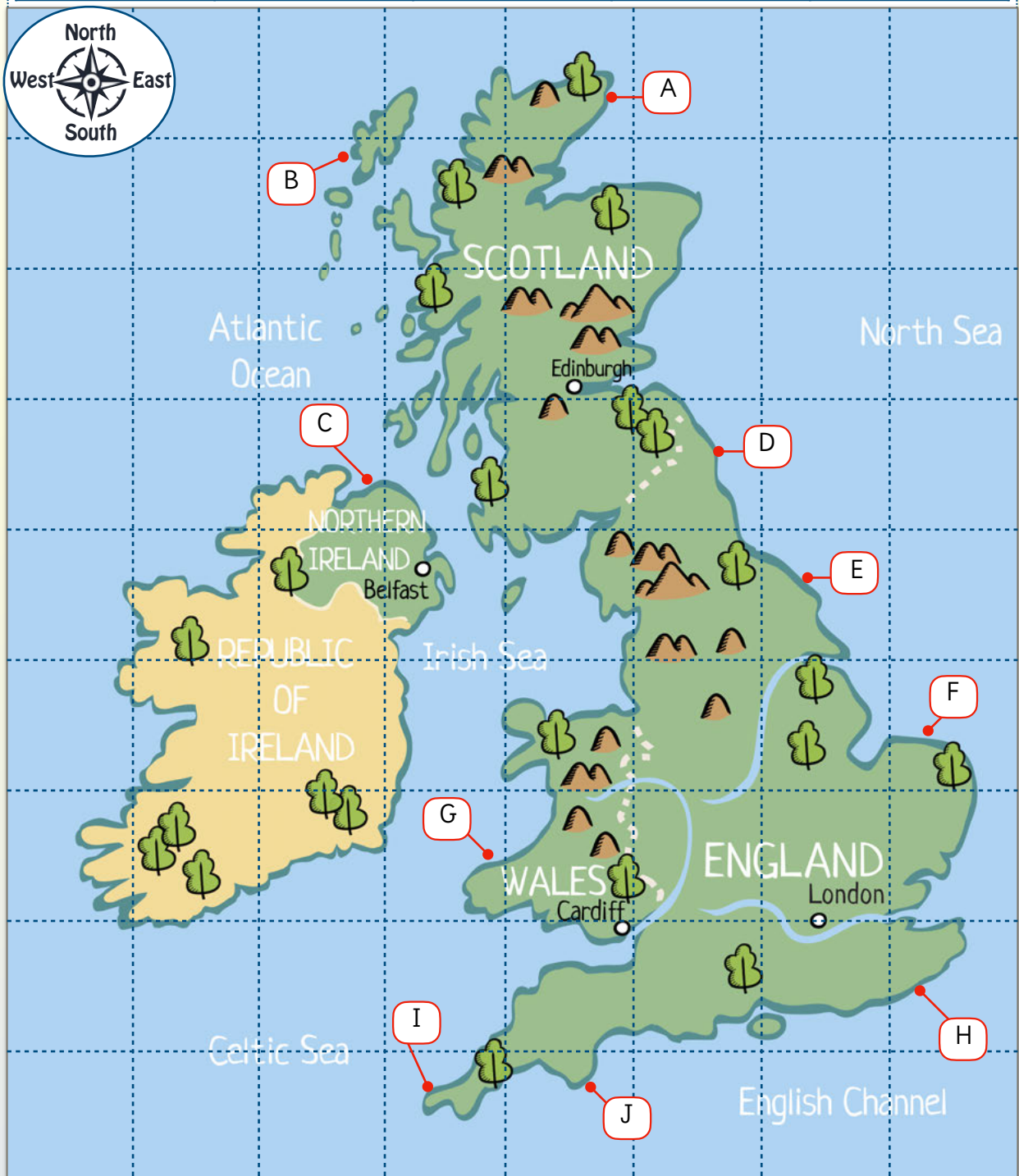
Name: \_\_\_\_\_

Date: \_\_\_\_\_




Help the characters navigate from from one seaside location to another. Use the grid, the compass rose and the key to help you.


A Caithness	B Hushinish	C Portrush	D Bamburgh	E Scarborough
F Blakeney	G Fishguard	H Folkestone	I St Ives	J Dartmouth









How can I get from Hushinish to Portrush?




How can I get from Portrush to Bamburgh?




How can I get from St Ives to Fishguard?




How can I get from Folkestone to Blakeney?




How can I get from Bamburgh to Scarborough?



How can I get from Caithness to Hushinish?






How can I get from Hushinish to Bamburgh?



Hushinish



Bamburgh



How can I get from Portrush to Scarborough?



Portrush



Scarborough



How can I get from St Ives to Folkestone?



St Ives



Folkestone



How can I get from Folkestone to Dartmouth?




Folkestone




Dartmouth



How can I get from Bamburgh to Fishguard?



Bamburgh




Fishguard



How can I get from Caithness to Blakeney?



Caithness



Blakeney